




**An excellent first grade and excellent character for every pupil**

### INSTRUCTIONS:

- Write the answer in the space provided.
- Use good and neat handwriting

NAME:.....STREAM;.....

1.	What is $4000 + 800 +$ in short?	2.	Find the numbers coming before and after 1978 Before: After:
3.	Write the following in figures.  		
4.	Multiply these numbers. $\begin{array}{r} 131 \\ \times 2 \\ \hline \\ \hline \end{array}$	5.	Draw $\frac{5}{6}$ and shade in the space below.
6.	Fill in the box correctly. $8 - \square = 6$	7.	Name the second month of the year.
8.	Find the value of the underlined digits. $\begin{array}{cccc} 4 & \underline{6} & \underline{2} & 1 \\ &   &   & \\ & \text{---} & \text{---} & \end{array}$		
9.	Write 999 in words.		

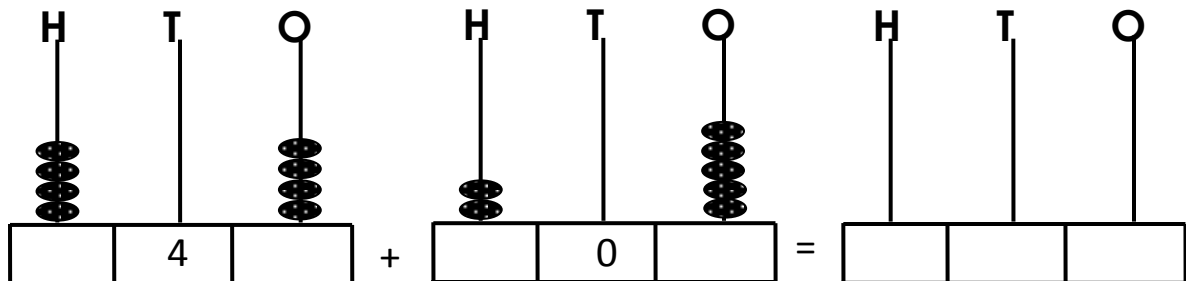
10. Re-arrange the following numbers in a descending order.  
496, 486, 456, 476

### SECTION B

21. Complete the puzzle below.

Number of girls	1	2	3	4	5	6	7
Number of hands				8			

22. (a) Complete the abacus.

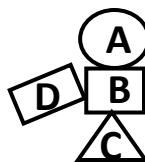


(b) Use sticks and bundles the represent.

(i) 2 2 4

(ii) 65

23. Name the shapes below.



A \_\_\_\_\_


B \_\_\_\_\_

C \_\_\_\_\_

(b) How many sides has shape C?

(b) How many sides has shape B?

24. Study the pictograph below.



(a) How many cups does mike have?

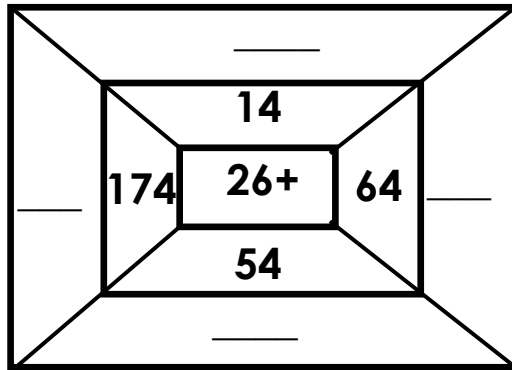
(b) How many cups does Sarah have?

(c) Who has the lowest number of cups?

(d) Which people have the same number of cups?

(e) If Ann was added 2 more cups, how many cups would she have altogether?

25. (a) Complete the puzzle below.



(b) Write these in words.

7th \_\_\_\_\_

10th \_\_\_\_\_

FOR ASSISTANCE CONTACT US ON:		
<b>Victoria Mutundwe P/S</b>	<b>Makindye Junior School</b>	<b>Golden Junior School</b>
Tr. Scovia – 0756658370 Tr. Amerika - 0750507002	Tr. Dion – 0758522705 Tr. zzimbe – 0700838001	Tr. Resty - 0752959162

**WE MISS YOU**